

Y4 Elite Homework 13 Answers

English Grammar and Punctuation

Comprehension

Cloze Tom Sawyer

Tradition

1) c

2) d

3) a

4) b

5) d

In Service

1) b

2) a

3) d

4) d

Flags

1) b

2) d

3) a

4) d

5) c

6) a

1) growing

2) punishment

3) romance

4) fight

5) apprehended

6) freedom

7) struck

8) funeral

9) venturing

10) greater

1 had set

2 I find baking tricky – there are too many things to go wrong.

3 Was the ending funny

4 There are two places that I have always wanted to visit: the Arctic and Antarctica.

5 We heard thunder, but we did not see any lightning.

6 Lately, the days have been growing noticeably
longer and warmer.

7 determiner

- 8
- The engineer thought her latest invention/inventions would solve the problem.
 - The engineer thought her latest inventor/inventors would solve the problem.

9 When Jack's grandmother came to stay, she gave Jack some money.

him

Jack used his money to buy a new game called Gables. Jack could not

He

wait to get home and play the new game.

it

10

	Singular	Plural
The <u>customers'</u> hunger was satisfied by the pizza.		✓
The <u>princess's</u> slippers were made of glass.	✓	
Those are the <u>boys'</u> books.		✓

Spelling


Spaghetti Dinner

Last night my father **made** us a spaghetti dinner. He **makes** the best meatballs in the world! I ate lots of spaghetti. My brother **spilled** sauce on his white shirt. **We** all laughed. I love when **my** dad makes spaghetti!


Hannah's Halloween Scare

Hannah wanted to scare her **little** brother. First, she put on a green **Frankenstein** mask. Then, she **hid** behind the couch and waited for her brother **to** come home. When he **walked** in the door, Hannah jumped out from behind the couch and yelled, "**Boo!**" **Hannah's** brother **didn't** jump. He didn't **even** look scared at all. He just smiled and **said**, "Oh, hello Hannah."

What Time Is it ?




3:50 11:45 4:33




1:54 12:40 2:03

Draw the Hands on the Clock Face



Six past Five Ten after Ten Twenty-four 'til One





What time is on the clock?

What time will it be in 2 hours?

What time will it be in 1 hour?

What time will it be in 3 hours and 20 minutes?



What time is on the clock?

What time will it be in 4 hours and 20 minutes?

What time will it be in 2 hours and 40 minutes?

What time will it be in 1 hour?



5:35

7:35

6:35

8:55

7:10

11:30

9:50

8:10



Clock A



Clock B

What time is on Clock A?

1:21

What time is on Clock B?

4:08

How much time has elapsed between Clock A and B?

2hrs 39min



Clock A



Clock B

What time is on Clock A?

8:35

What time is on Clock B?

4:30

How much time has elapsed between Clock A and B?

55min



How Much Time Has Elapsed?

1) 6:08 P.M. to 6:34 P.M.

26 min

2) 2:25 P.M. to 3:02 P.M.

37 min

3) 2:40 A.M. to 2:52 A.M.

12 min

4) 10:28 P.M. to 10:47 P.M.

19 min

5) 9:33 A.M. to 10:10 A.M.

37 min

6) 6:06 P.M. to 6:26 P.M.

20 min

7) 7:25 P.M. to 7:54 P.M.

29 min


8) 3:26 A.M. to 4:08 A.M.

42 min

Fill out each missing clock based off the time of it's pair.



17:28



19:49



16:10



Start Time	End Time	Elapsed Time
5:12 A.M.	9:48 A.M.	4 hours 36 min
5:31 PM	8:18 P.M.	2 Hours & 47 Minutes
3:26 P.M.	5:47 PM	2 Hours & 21 Minutes
8:09 AM	9:32 A.M.	1 Hours & 23 Minutes
11:36 AM	3:26 A.M.	3 Hours & 50 Minutes

Here is part of a train timetable for six trains from Birmingham to London.

Train	A	B	C	D	E	F
Birmingham	06 35	07 00	07 15	07 30	07 45	08 00
London	08 09	08 39	08 48	09 04	09 59	09 39

(a) Which train takes more than 2 hours to go from Birmingham to London?

E

(b) Work out the number of minutes taken by train D to go from Birmingham to London.



94 minutes

Paula has to go to a meeting in London. She will catch one of the six trains from Birmingham. She needs to arrive in London before 09 00

7.15 (C)

(c) Write down the latest train that she can catch.

Reading				
22	Slough			
28	40	Guildford		
30	22	47	Oxford	
45	28	66	25	Buckingham

The table gives distances in miles by road between some towns.

(a) Write down the distance between Reading and Guildford.



28 miles

Sophie drives from Slough to Guildford. She then drives from Guildford to Reading. Sophie then drives from Reading to Slough.

(b) Work out the total distance that she drives.

90 miles

NVR Analogy

- 1) a
- 2) a
- 3) a
- 4) b

Odd One out

- 1) b
- 2) a
- 3) d
- 4) b
- 5) d

Series

- 1) b
- 2) a
- 3) b
- 4) c
- 5) c

Codes

- 1) a
- 2) e
- 3) d
- 4) d

Matrices

- 1) d
- 2) a
- 3) b
- 4) e
- 5) c

Similar shapes

- 1) C
- 2) b
- 3) a
- 3) a

Jumping : Find the code

1. HSFFO (+1 +1 +1 +1 +1)
2. PTHDS (-1 -1 -1 -1 -1)
3. UTHI (+1 +2 +3 +4)
4. EAZOS (-1 -4 -1 -4 -1)
5. VBLDQBH (+3 -1 +3 -1 +3 -1 +3)
6. YMZXP (+5 -5 +5 -5 +5)

Jumping: Find the word

1. BUSH (-1 -1 -1 -1)
2. RUN (-1 -2 -3)
3. GULL (+2 -2 +2 -2)
4. PLAY (-3 -3 -3 -3)
5. SISTER (+1 +2 +3 +4 +5 +6)
6. LAUGHTER (-2 +1 -2 +1 -2 +1 -2 +1)